











## Addition Match-Up: Rockets to Planets

Name: \_\_\_\_\_

Date: \_\_\_\_\_

### Instructions:

Draw a line to match each rocket with its correct planet based on the addition problems and their sums.

Rockets	Planets
<ul style="list-style-type: none"><li> <b>Rocket A: <math>2 + 3 =</math></b> _____</li></ul>	<ul style="list-style-type: none"><li> <b>Planet Earth: 5</b></li></ul>
<ul style="list-style-type: none"><li> <b>Rocket B: <math>4 + 1 =</math></b> _____</li></ul>	<ul style="list-style-type: none"><li> <b>Moon: 7</b></li></ul>
<ul style="list-style-type: none"><li> <b>Rocket C: <math>5 + 2 =</math></b> _____</li></ul>	<ul style="list-style-type: none"><li> <b>Planet X: 8</b></li></ul>
<ul style="list-style-type: none"><li> <b>Rocket D: <math>3 + 6 =</math></b> _____</li></ul>	<ul style="list-style-type: none"><li> <b>Star Planet: 9</b></li></ul>
<ul style="list-style-type: none"><li> <b>Rocket E: <math>7 + 2 =</math></b> _____</li></ul>	<ul style="list-style-type: none"><li> <b>Planet Y: 10</b></li></ul>

### Answer Key (For Teacher Use)

- Rocket A** ( $2 + 3$ ) matches with **Planet Earth** (5).
- Rocket B** ( $4 + 1$ ) matches with **Planet Y** (5).
- Rocket C** ( $5 + 2$ ) matches with **Planet X** (7).
- Rocket D** ( $3 + 6$ ) matches with **Star Planet** (9).
- Rocket E** ( $7 + 2$ ) matches with **Moon** (9).