











### Addition Match-Up: Rockets to Planets

Name: \_\_\_\_\_

Date: \_\_\_\_\_

Instructions:

Draw a line to match each rocket with its correct planet based on the subtraction problems

Rockets	Planets
•  <b>Rocket A: 3 - 1 =</b> _____	•  <b>Planet Earth: 1</b>
•  <b>Rocket B: 4 - 3 =</b> _____	•  <b>Moon: 4</b>
•  <b>Rocket C: 10 - 2 =</b> _____	•  <b>Planet X: 3</b>
•  <b>Rocket D: 7 - 4 =</b> _____	•  <b>Star Planet: 8</b>
•  <b>Rocket E: 9 - 5 =</b> _____	•  <b>Planet Y: 2</b>